

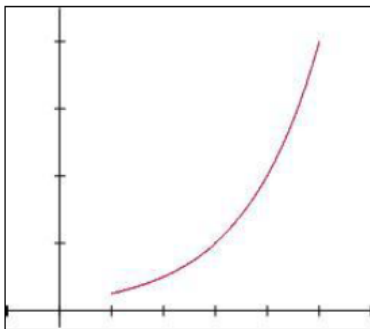
Worksheet 3. Solutions

Speed is the absolute value of velocity. It tells you how fast something is moving without regard to the direction of movement.

1. What effect does absolute value have on numbers? **Absolute value makes all numbers non-negative.**
2. What effect does taking the absolute value of a function have on its graph? **Taking the absolute value of a function will cause any portion of its graph that is below the x -axis to be reflected across the x -axis.**

For each situation below, the graph of a differentiable function giving velocity as a function of time t is shown for $1 \leq t \leq 5$, along with selected values of the velocity function. In the graph, each horizontal grid mark represents 1 unit of time and each vertical grid mark represents 4 units of velocity. For each situation, plot the speed graph on the same coordinate plane as the velocity graph and fill in the speed values in the table. Then, answer the questions below based on both the graph and the table of values.

Situation 1: Speed graph



time	velocity	speed
1	1	1
2	2	2
3	4	4
4	8	8
5	16	16

In this situation, the velocity is positive and increasing.

Positive or negative? Increasing or decreasing?

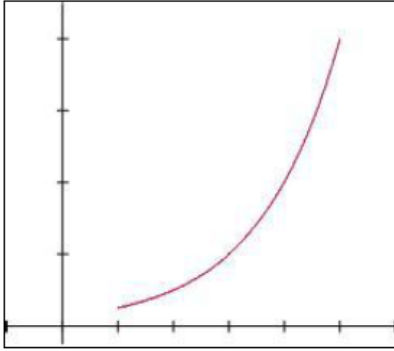
Because velocity is increasing, we know acceleration is positive.

Increasing or decreasing? Positive or negative?

By examining the graph of speed and the table of values, we can conclude that speed is increasing.

Increasing or decreasing?

Situation 2: Speed graph



time	velocity	speed
1	-1	1
2	-2	2
3	-4	4
4	-8	8
5	-16	16

In this situation, the velocity is negative and decreasing.

Positive or negative? Increasing or decreasing?

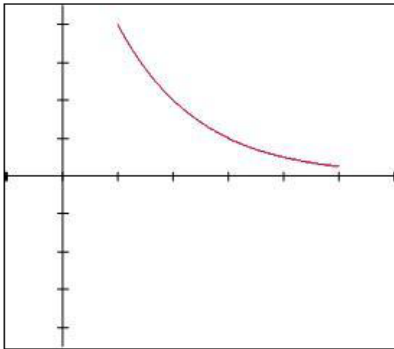
Because velocity is decreasing, we know acceleration is negative.

Increasing or decreasing? Positive or negative?

By examining the graph of speed and the table of values, we can conclude that speed is increasing.

Increasing or decreasing?

Situation 3: Speed graph



time	velocity	speed
1	-16	16
2	-8	8
3	-4	4
4	-2	2
5	-1	1

In this situation, the velocity is negative and increasing.

Positive or negative? Increasing or decreasing?

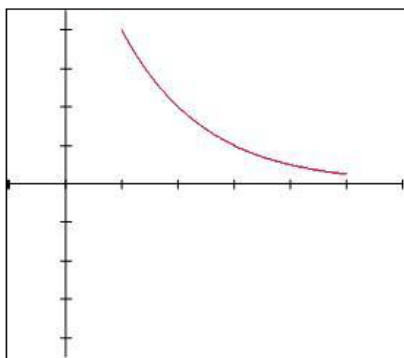
Because velocity is increasing, we know acceleration is positive.

Increasing or decreasing? Positive or negative?

By examining the graph of speed and the table of values, we can conclude that speed is decreasing.

Increasing or decreasing?

Situation 4: Speed graph



time	velocity	speed
1	16	16
2	8	8
3	4	4
4	2	2
5	1	1

In this situation, the velocity is positive and decreasing.
Positive or negative? Increasing or decreasing?

Because velocity is decreasing, we know acceleration is negative.
Increasing or decreasing? Positive or negative?

By examining the graph of speed and the table of values, we can conclude that speed is decreasing.
Increasing or decreasing?

Conclusion:

In which situations was the speed increasing? Situations 1 and 2

When the speed is increasing, the velocity and acceleration have the same signs.
Same or opposite?

In which situations was the speed decreasing? Situations 3 and 4

When the speed is decreasing, the velocity and acceleration have opposite signs.
Same or opposite?