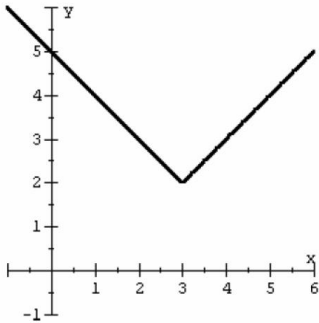


Increasing, decreasing, and constant intervals.

For each graph, write in interval notation where the graph is increasing, decreasing, or constant.

1.

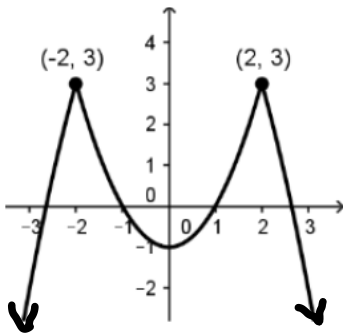


Increasing:

Decreasing:

Constant:

2.

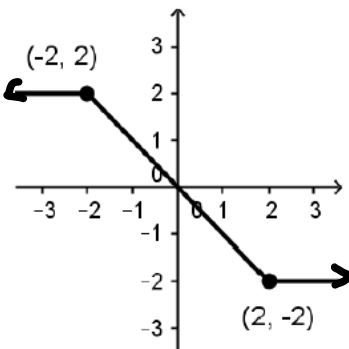


Increasing:

Decreasing:

Constant:

3.

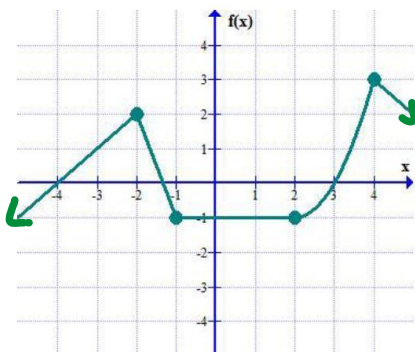


Increasing:

Decreasing:

Constant:

4.



Increasing:

Decreasing:

Constant: